
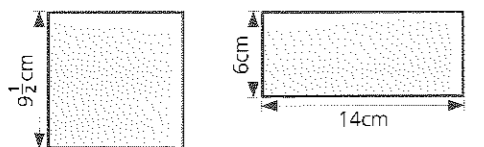
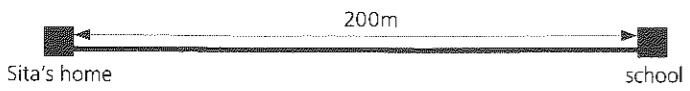


Write the numbers 1 to 20 down the side of a sheet of paper.
Write alongside these numbers the **answers only** to the following questions.
Work as quickly as you can. Time allowed – **10 minutes**.

- 1 $18 + \dots = 31$ _____ 13
- 2 $\frac{1}{8}$ of 56 = _____ 7
- 3 $2000 + 300 + 5 =$ _____ 2305
- 4 Subtract 6 from 1005. _____ 999
- 5 10 rulers each measuring 30cm are placed end to end.
Find the total length of the rulers in metres. _____ 3m
- 6 How many metres less than $\frac{1}{2}$ km is 380m? _____ 120m
- 7 How many 10ps are equal in value to £4.30? _____ 43 10ps
- 8 Write £2.75 to the nearest 10p. _____ £2.80
- 9 Find the difference in millilitres between 675ml and half a litre. _____ 175ml
- 10 How many days altogether in the 5th and 6th months of the year? _____ 61
- 11  Which two coins must be added to those shown to make a total of £3? _____ 50p and 10p
- 12 If half a kilogram of toffee costs 75p, how much will 100g cost? _____ 15p
- 13 An office opens at 9.30 a.m. and closes at 4.30 p.m. How many hours is it open? _____ 7h
- 14 If £4.00 is shared equally among five children, how much does each get? _____ 80p
- 15  How much greater is the distance around the rectangle than the distance around the square?
Write the answer in millimetres. _____ 20mm
- 16 There were 7l of oil in a can. How many litres and millilitres remain when 700ml are used? _____ 6l 300ml
- 17 How many 8cm lengths can be cut from a strip half a metre long? _____ 6
- 18 How much change from a £5 note after spending £1.50 and £2.30? _____ £1.20
- 19  Sita walks to school in the morning and returns in the evening.
How many kilometres does she walk in 5 days? _____ 2km
- 20 Six bags of popcorn of equal mass together have a mass of 1kg 200g.
What is the mass of four of the bags of popcorn? _____ 800g

You will work through Progress Test 2 at **four** different times – once at the end of Section 2, then again after you have completed each of Section 3 Test 4, Test 8 and Test 12.

When you first complete the test:

- a colour the first column to show the number of answers correct out of 20
- b enter the date.

Each time you take the test, enter the result and the date in the marked columns.

	1st	2nd	3rd	4th
20				
19				
18				
17				
16				
15				
14				
13				
12				
11				
10				
9				
8				
7				
6				
5				
4				
3				
2				
1				
0				
date				